
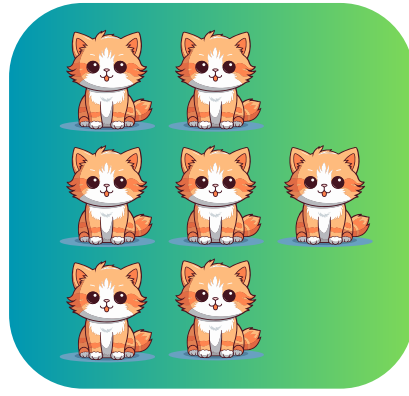


# Count and Add


Count the animals and add them to find the total.




+




=




+



=



+



=



# Addition

Identify the larger number and count on using your fingers. Fill in the blank with the answer.

$9+1=\underline{\quad}$

$3+5=\underline{\quad}$

$17+1=\underline{\quad}$

$12+8=\underline{\quad}$

$10+8=\underline{\quad}$

$7+8=\underline{\quad}$

$11+4=\underline{\quad}$

$15+3=\underline{\quad}$

$13+6=\underline{\quad}$





$6+5=\underline{\quad}$

$14+0=\underline{\quad}$

$9+2=\underline{\quad}$


# Addition: Word Problems

Read each word problem. Find the answer. Show your work on the right side column.

1	<p>Lila has 11 apples. Her friend gives her 2 more apples. How many apples does Lila have now?</p> <p>Answer: _____ apples</p> 	
2	<p>Tom has 5 toy cars, and he buys 7 more from the store. How many toy cars does Tom have in total?</p> <p>Answer: _____ cars</p> 	
3	<p>There are 16 birds on a tree. 3 more birds join them. How many birds are on the tree now?</p> <p>Answer: _____ birds</p> 	
4	<p>Sally has 7 candies. Her mom gives her 13 more candies. How many candies does Sally have?</p> <p>Answer: _____ candies</p> 	

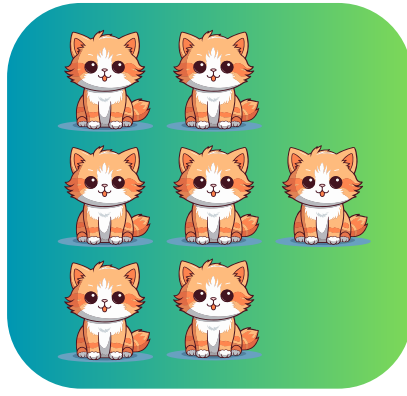
# Answer Key Count and Add

Count the animals and add them to find the total.



12


+



7


=

19



8


+



6


=

14



15

+



5

=

20

Answer Key

# Addition

Identify the larger number and count on using your fingers. Fill in the blank with the answer.

$$9+1=\underline{10}$$

$$3+5=\underline{8}$$

$$17+1=\underline{18}$$

$$12+8=\underline{20}$$

$$10+8=\underline{18}$$

$$7+8=\underline{15}$$

$$11+4=\underline{15}$$

$$15+3=\underline{18}$$

$$13+6=\underline{19}$$





$$6+5=\underline{11}$$

$$14+0=\underline{14}$$

$$9+2=\underline{11}$$

# Addition: Word Problems

Read each word problem. Find the answer. Show your work on the right side column.

1	<p>Lila has 11 apples. Her friend gives her 2 more apples. How many apples does Lila have now?</p> <p>Answer: <u>13</u> apples</p> 	$\begin{array}{r} 11 \\ + 2 \\ \hline 13 \\ \hline \end{array}$
2	<p>Tom has 5 toy cars, and he buys 7 more from the store. How many toy cars does Tom have in total?</p> <p>Answer: <u>12</u> cars</p> 	$\begin{array}{r} 5 \\ + 7 \\ \hline 12 \\ \hline \end{array}$
3	<p>There are 16 birds on a tree. 3 more birds join them. How many birds are on the tree now?</p> <p>Answer: <u>19</u> birds</p> 	$\begin{array}{r} 16 \\ + 3 \\ \hline 19 \\ \hline \end{array}$
4	<p>Sally has 7 candies. Her mom gives her 13 more candies. How many candies does Sally have?</p> <p>Answer: <u>20</u> candies</p> 	$\begin{array}{r} 13 \\ + 7 \\ \hline 20 \\ \hline \end{array}$