



Subtraction


Subtract the vegetables by crossing out to find the difference.



$$20 - 6 = \bigcirc$$



$$14 - 5 = \bigcirc$$




$$18 - 8 = \bigcirc$$


Answer Key

Subtraction


Subtract the vegetables by crossing out to find the difference.



$$20 - 6 = 14$$



$$14 - 5 = 9$$



$$18 - 8 = 10$$

Subtraction in Columns

Do the subtraction. Fill in the blank with the answer.

$\begin{array}{r} 11 \\ - 2 \\ \hline \\ \hline \end{array}$	$\begin{array}{r} 19 \\ - 1 \\ \hline \\ \hline \end{array}$	$\begin{array}{r} 17 \\ - 7 \\ \hline \\ \hline \end{array}$	$\begin{array}{r} 10 \\ - 8 \\ \hline \\ \hline \end{array}$
$\begin{array}{r} 11 \\ - 4 \\ \hline \\ \hline \end{array}$	$\begin{array}{r} 18 \\ - 6 \\ \hline \\ \hline \end{array}$	$\begin{array}{r} 20 \\ - 7 \\ \hline \\ \hline \end{array}$	$\begin{array}{r} 12 \\ - 5 \\ \hline \\ \hline \end{array}$
$\begin{array}{r} 19 \\ - 2 \\ \hline \\ \hline \end{array}$	$\begin{array}{r} 16 \\ - 5 \\ \hline \\ \hline \end{array}$	$\begin{array}{r} 15 \\ - 3 \\ \hline \\ \hline \end{array}$	$\begin{array}{r} 13 \\ - 9 \\ \hline \\ \hline \end{array}$

Answer Key





Subtraction in Columns

Do the subtraction. Fill in the blank with the answer.

$\begin{array}{r} 0 \ 11 \\ \cancel{11} \\ - 2 \\ \hline 9 \\ \hline \end{array}$	$\begin{array}{r} 19 \\ - 1 \\ \hline 18 \\ \hline \end{array}$	$\begin{array}{r} 17 \\ - 7 \\ \hline 10 \\ \hline \end{array}$	$\begin{array}{r} 0 \ 10 \\ \cancel{10} \\ - 8 \\ \hline 2 \\ \hline \end{array}$
$\begin{array}{r} 0 \ 11 \\ \cancel{11} \\ - 4 \\ \hline 7 \\ \hline \end{array}$	$\begin{array}{r} 18 \\ - 6 \\ \hline 12 \\ \hline \end{array}$	$\begin{array}{r} 1 \ 10 \\ \cancel{20} \\ - 7 \\ \hline 13 \\ \hline \end{array}$	$\begin{array}{r} 0 \ 12 \\ \cancel{12} \\ - 5 \\ \hline 7 \\ \hline \end{array}$
$\begin{array}{r} 19 \\ - 2 \\ \hline 17 \\ \hline \end{array}$	$\begin{array}{r} 16 \\ - 5 \\ \hline 11 \\ \hline \end{array}$	$\begin{array}{r} 15 \\ - 3 \\ \hline 12 \\ \hline \end{array}$	$\begin{array}{r} 0 \ 13 \\ \cancel{13} \\ - 9 \\ \hline 4 \\ \hline \end{array}$





Subtraction: Word Problems

Read each word problem. Find the answer. Show your work on the right side column.

1	<p>Liam had 18 balloons. 5 balloons popped. How many balloons does Liam have left?</p> <p>Answer: _____ balloons</p> 	
2	<p>Sophia had 12 toy cars. She gave 4 toy cars to her little brother. How many toy cars does Sophia have left?</p> <p>Answer: _____ cars</p> 	
3	<p>Emma baked 10 cookies. Her family ate 4 cookies. How many cookies does Emma have now?</p> <p>Answer: _____ cookies</p> 	
4	<p>A tree had 14 apples. 3 apples fell to the ground. How many apples are still on the tree?</p> <p>Answer: _____ apples</p> 	

Subtraction: Word Problems

Read each word problem. Find the answer. Show your work on the right side column.

1	<p>Liam had 18 balloons. 5 balloons popped. How many balloons does Liam have left?</p> <p>Answer: <u>13</u> balloons</p> 	$\begin{array}{r} 18 \\ - 5 \\ \hline 13 \\ \hline \end{array}$
2	<p>Sophia had 12 toy cars. She gave 4 toy cars to her little brother. How many toy cars does Sophia have left?</p> <p>Answer: <u>8</u> cars</p> 	$\begin{array}{r} 0 \ 12 \\ \cancel{1} \cancel{2} \\ - 4 \\ \hline 8 \\ \hline \end{array}$
3	<p>Emma baked 10 cookies. Her family ate 4 cookies. How many cookies does Emma have now?</p> <p>Answer: <u>6</u> cookies</p> 	$\begin{array}{r} 0 \ 10 \\ \cancel{1} \cancel{0} \\ - 4 \\ \hline 6 \\ \hline \end{array}$
4	<p>A tree had 14 apples. 3 apples fell to the ground. How many apples are still on the tree?</p> <p>Answer: <u>11</u> apples</p> 	$\begin{array}{r} 14 \\ - 3 \\ \hline 11 \\ \hline \end{array}$